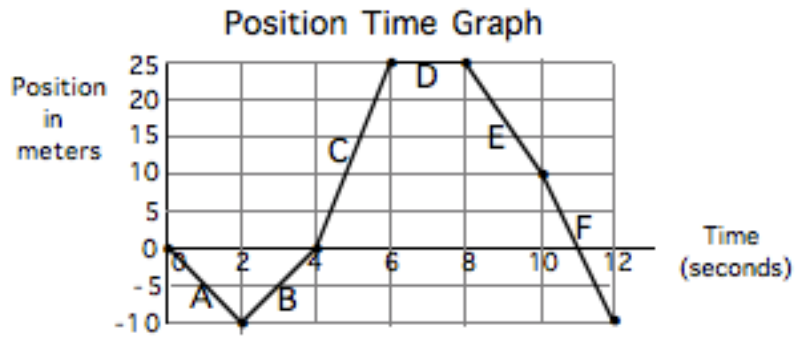


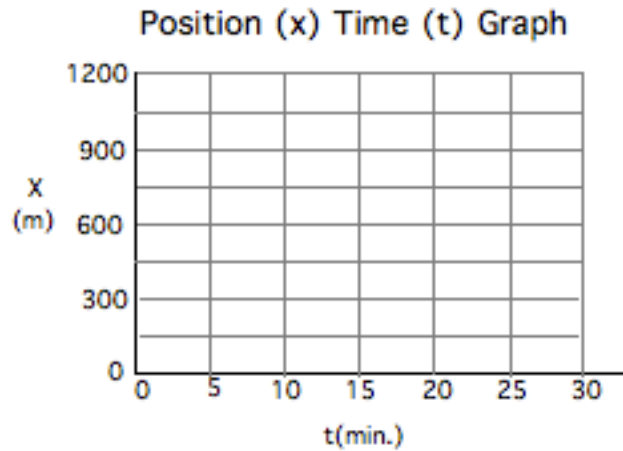
1. Consider the position time graph shown at the right to answer the questions that follow.



- During which interval (A,B etc) is the object stationary?
- During which intervals is the object moving in the negative direction?
- In which interval is the object moving the fastest in the positive direction?
- At what times is the object located at the origin?
- Calculate the object's velocity during interval B.
- Calculate the object 's velocity during interval F.
- What is the total distance travelled?
- What is the total displacement?

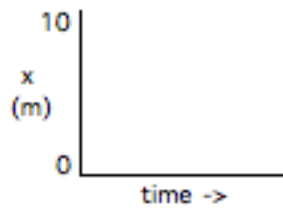
2. A person goes for a walk from his house. He walks at a constant velocity of 60 m/min for 20 minutes. He stops for 5 minutes, then jogs back home in 5 minutes at a constant rate.

- a. Draw a graph which relates the information given above.
- b. With what speed did the person jog back home?

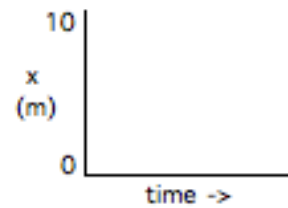


3. Sketch a graph which represents each of the following motions.

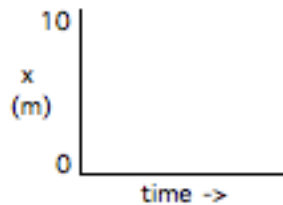
a) A stone is dropped from a height of 10 m. As it falls, it steadily picks up speed until it suddenly comes to halt on the ground.



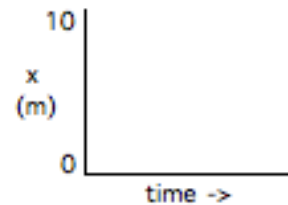
b) A stone is tossed straight upwards to a maximum height of 10 m. It steadily loses speed on its way up, then steadily gains speed on its way down.



c) A ball is dropped from a height of 10 m, hits the floor and bounces up to the same height.



d) a ball rolls along a floor at constant speed, hits a wall 10 m away, then rolls back again at the **same speed**.

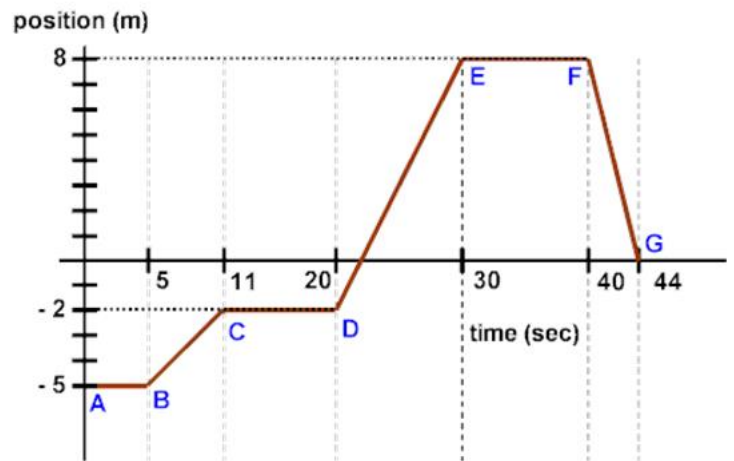


Position Time Graph Practice

Name: _____

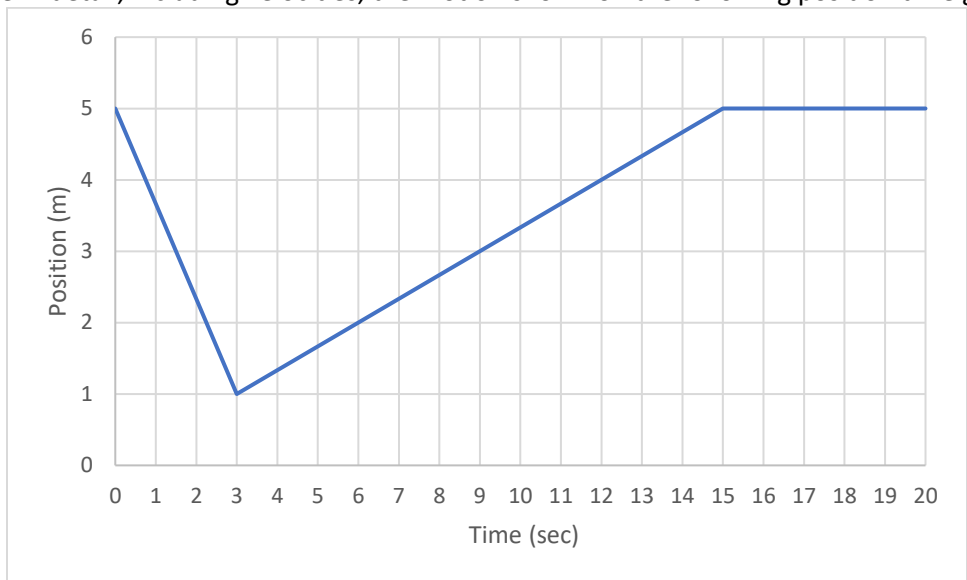
4. Consider the position time graph shown on the right

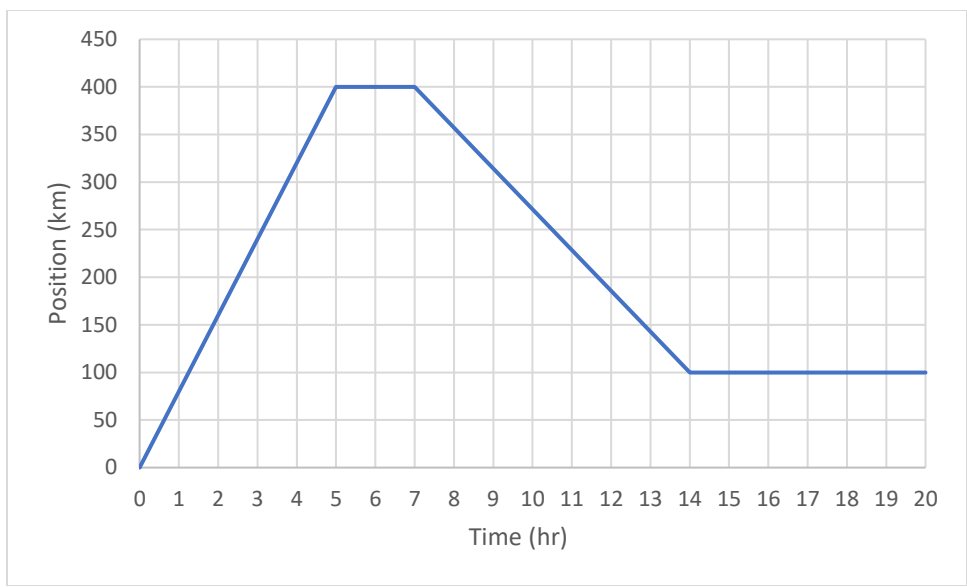
- a. During which time interval (AB, BC, CD, DE, EF, FG) was the object traveling at its greatest speed?
- b. During which time interval (AB, BC, CD, DE, EF, FG) was the object traveling at its least (nonzero) speed?



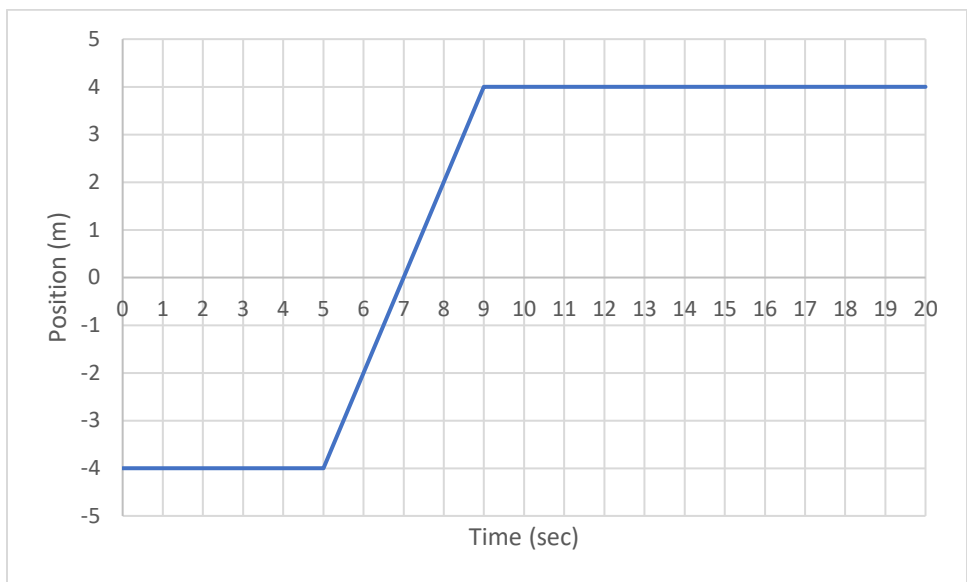
- c. During which time interval(s) (AB, BC, CD, DE, EF, FG) was the object at rest?
- d. During which time interval(s) (AB, BC, CD, DE, EF, FG) did the object travel in a negative direction?
- e. What was the object's speed at 42 seconds?
- f. What was the object's velocity at 42 seconds?
- g. What was the cart's displacement over the entire graph?
- h. What was the cart's average velocity during these 44 seconds?

5. Describe in detail, including velocities, the motion shown on the following position time graphs.



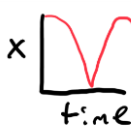





b.



Answer Key

1a) D	1b) A, E and F	1c) C	1d) 0, 4 and 11 sec	1e) 5 m/sec
1f) -10 m/sec	1g) 80 m	1h) -10 m	2a) Should have straight line from (0,0) to (20,1200), then to (25, 1200) and finally straight back to (30,0)	2b) 240 m/min
3a) 	3b) 	3c) 	3d) 	4a) FG
4b) BC	4c) AB, CD, EF	4d) FG	4e) 2 m/s	4f) -2m/s
4g) 5m	4h) 0.11 m/s	5a) First moves in negative direction at -1.3 m/s, then in positive direction at 0.3 m/s, last 5 seconds it is at rest	5b) First moves in the positive direction at 80 km/hr, then rests for 2 hours, then moves in negative direction at 43 km/hr until t=14 and it stationary afterwards	5c) At rest until t=5, then moves in the positive direction at 2 m/s from t=5 to t=9. From t=9 onwards it doesn't move.