


Measurement

Name: _____

Measure the following items, give your measurements in both centimetres and inches.


Round cm measurements to one decimal place

Round inch measurements to the nearest 1/16th of an inch.



Length of line

_____ cm _____ in




Interior diameter

_____ cm _____ in

Exterior diameter

_____ cm _____ in



Height

_____ cm _____ in

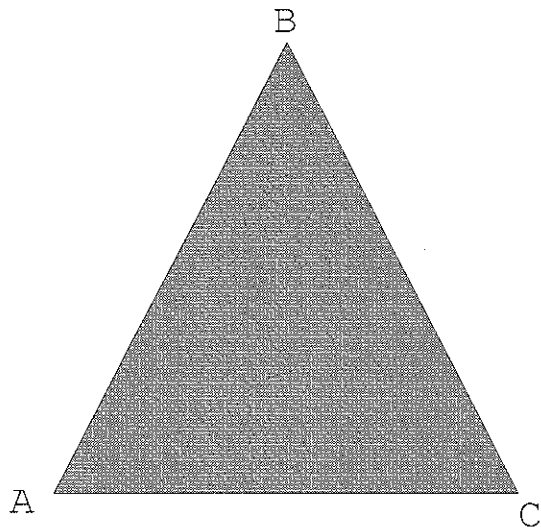
Length

_____ cm _____ in

For the following measurements

Give SI measurement in millimetres (rounded to the nearest whole millimetre)

Give Imperial measurement rounded to the nearest quarter inch



Distance from A to B


67 mm 2 ³/₄ in

Distance from B to C

_____ mm _____ in

Distance from A to C

_____ mm _____ in



Interior radius

_____ mm _____ in

Exterior radius

_____ mm _____ in

Thickness of line

_____ mm _____ in