


Area

Name _____

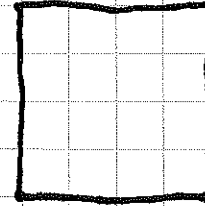
① Find one other rectangle which has the same area as its perimeter.

ex)

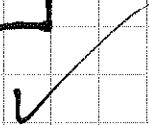


$$\begin{aligned} \text{Perimeter} &= 12 \\ \text{Area} &= 10 \end{aligned}$$

Perimeter and area are NOT the same



$$\begin{aligned} P &= 16 \\ A &= 16 \end{aligned}$$



② Trace your hand to determine the area of your hand print

My hand covers approximately squares.